

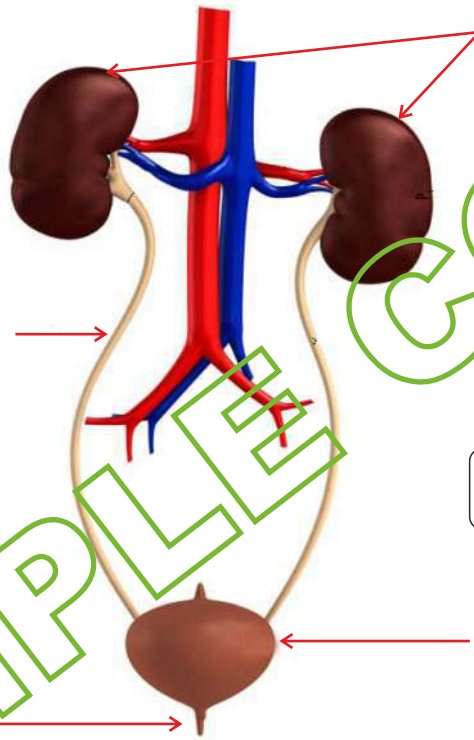
**HUMAN BODY**

Intelli Kid: \_\_\_\_\_

1. Identify the organs System, organs and write their names in the space provided. Also write the functions of the important organs in the organ system.

(A) \_\_\_\_\_ System      Function: \_\_\_\_\_

Function: \_\_\_\_\_



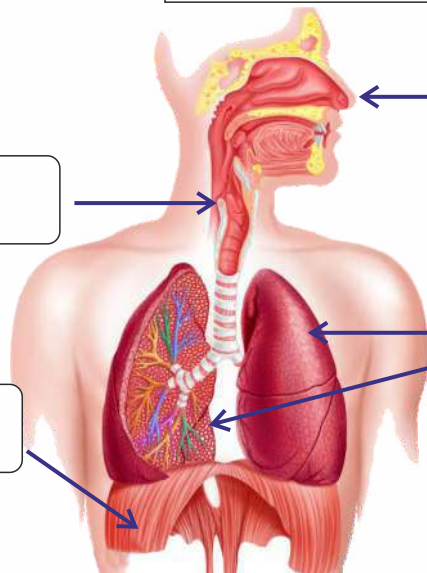
Function: \_\_\_\_\_

Function: \_\_\_\_\_

Function: \_\_\_\_\_

(B) \_\_\_\_\_ System      Function: \_\_\_\_\_

\_\_\_\_\_



\_\_\_\_\_

\_\_\_\_\_

Function: \_\_\_\_\_



# EXERCISE

Intelli Trios: Class-3  
Human Body



(C) \_\_\_\_\_ System Function: \_\_\_\_\_

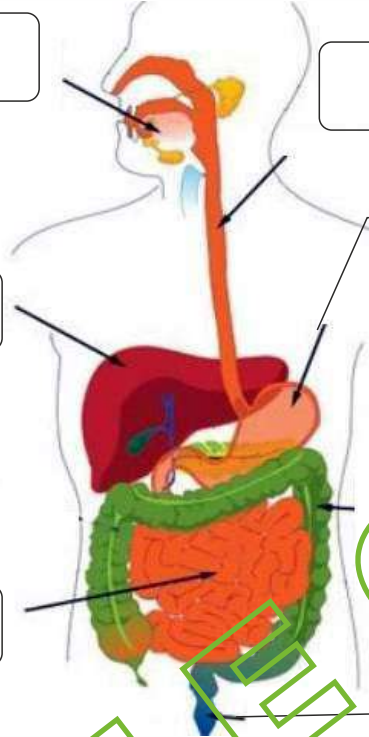
Function: \_\_\_\_\_

Function: \_\_\_\_\_

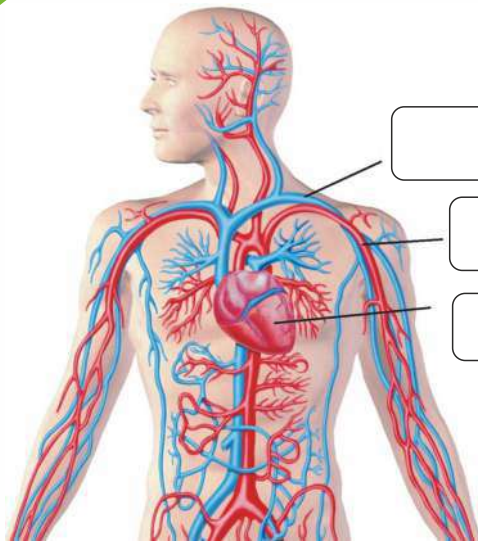
Function: \_\_\_\_\_

Function: \_\_\_\_\_

Function: \_\_\_\_\_



(D) \_\_\_\_\_ System Function: \_\_\_\_\_



Function: \_\_\_\_\_

SAMPLE COPY